

## 3D shape loop cards

I have


2

Who has the name  
of all 2D shapes?

I have  
**polygons**


Who has a  
six-sided shape  
with every side the  
same length?

I have a  
**regular  
hexagon**



Who has a  
five sided shape  
with sides of  
different lengths?

I have an  
**irregular  
pentagon**



Who has a 3D shape  
with five vertices?

## 3D shape loop cards

I have a  
**square-  
based  
pyramid**



Who has the  
number of edges  
on a cuboid?


I have  
**12**

Who has the  
number of vertices  
on an octahedron?

I have  
**6**



Who has a shape  
with three sides,  
each a different length?

I have a  
**scalene  
triangle**



Who has the name  
for all four sided shapes?

## 3D shape loop cards

<p><b>I have</b> quadrilaterals</p>	<p>Who has a six sided shape with angles of different sizes?</p>	<p><b>I have an</b> irregular hexagon</p> 	<p>Who has the name of all 3D shapes?</p>
<p><b>I have</b> polyhedrons</p>	<p>Who has a shape with six vertices and two triangular faces?</p>	<p><b>I have</b> triangular prism</p> 	<p>Who has the number of edges on a pentagonal prism?</p>

## 3D shape loop cards

I have

15

Who has the number of faces on a cylinder?


I have

3

Who has the shape with four right angles and four sides the same length?

I have a

square





Who has a three sided shape with a right-angle?

I have a right-angle triangle







Who has a shape with six square faces?

## 3D shape loop cards

<p>I have a <b>cube</b></p> 	<p>Who has a shape with one curved face and one circular face?</p>	<p>I have a <b>cone</b></p> 	<p>Who has the number of edges on a square based pyramid?</p>
<p>I have <b>8</b></p>	<p>Who has the number of faces on a decahedron?</p>	<p>I have <b>10</b></p>	<p>Who has an eight-sided shape with each side and angle the same?</p>

## 3D shape loop cards

<p>I have a <b>regular octagon</b></p> 	<p>Who has a three-sided shape with each angle the same size?</p>	<p>I have an <b>equilateral triangle</b></p> 	<p>Who has a shape with four faces, each an equilateral triangle?</p>
<p>I have a <b>tetrahedron</b></p> 	<p>Who has a shape with two circular faces?</p>	<p>I have a <b>cylinder</b></p> 	<p>Who has the number of vertices on a cone?</p>

## 3D shape loop cards

I have

1

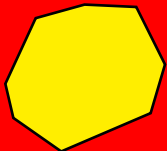
Who has a shape with twelve faces?

I have a  
dodecahedron




Who has an eight-sided shape with sides of different lengths?

I have an  
irregular  
octagon



Who has a five sided shape with each angle the same size?


I have a  
regular  
pentagon



Who has a shape with eight faces, two hexagonal and six rectangular?

## 3D shape loop cards

I have a  
**hexagonal  
prism**



Who has a 3D shape  
with no vertices  
or edges?

I have a  
**sphere**



Who has the number  
of vertices on  
a tetrahedron?

I have

**4**

Who has the number  
of faces on a cone?